

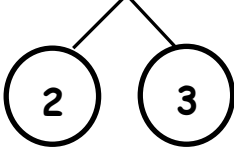


Όνομα: _____ Τάξη: _____

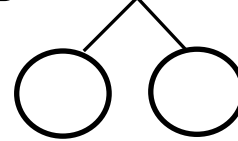
Υπερπήδηση δεκάδας

Λύσε τις πράξεις όπως το παράδειγμα:


$$\boxed{8} + \boxed{5} = \boxed{13}$$




$$\boxed{9} + \boxed{6} = \boxed{}$$



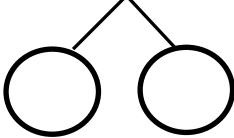
$$\boxed{9} + \boxed{5} = \boxed{}$$




$$\boxed{7} + \boxed{7} = \boxed{}$$




$$\boxed{8} + \boxed{6} = \boxed{}$$




$$\boxed{6} + \boxed{6} = \boxed{}$$




$$\boxed{8} + \boxed{7} = \boxed{}$$



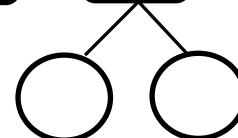
$$\boxed{7} + \boxed{4} = \boxed{}$$



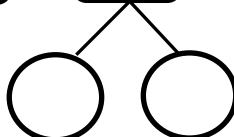
$$\boxed{9} + \boxed{7} = \boxed{}$$



$$\boxed{8} + \boxed{8} = \boxed{}$$



$$\boxed{9} + \boxed{4} = \boxed{}$$



$$\boxed{9} + \boxed{8} = \boxed{}$$

